



The Mathematics Test assesses National Curriculum Mathematics at Key Stage 2

**MATHEMATICS TEST - SPECIMEN QUESTIONS**



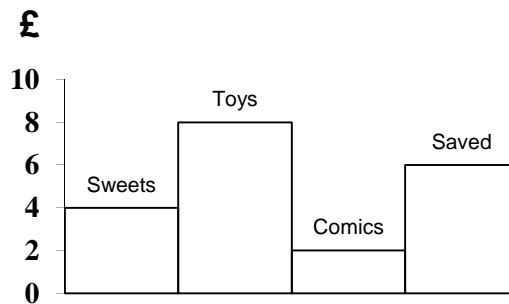
1. A girl buys a pen for 57p and a writing pad for £1.59. She pays with a £5 note. How much change does she receive?

2. Write down the missing number in the following pattern.

4   7   12   19   \_\_\_\_\_   39



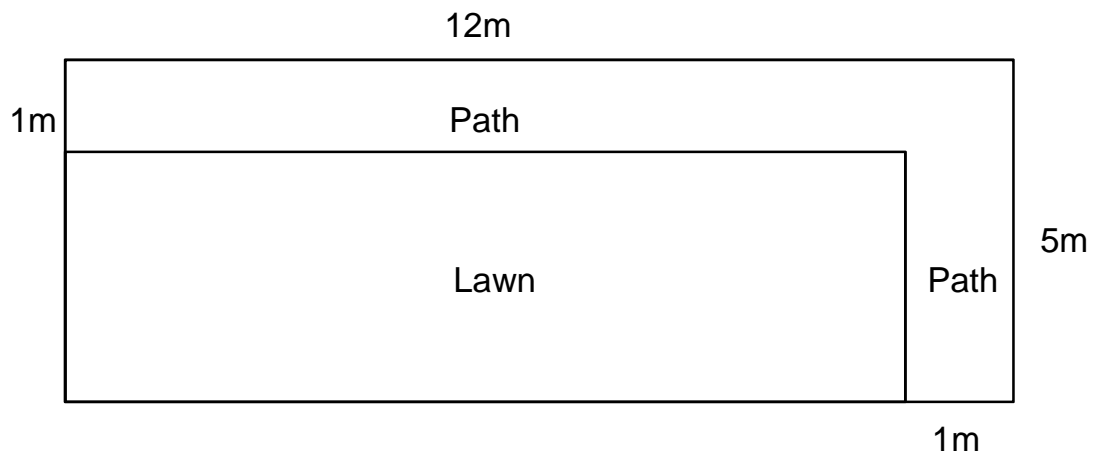
3. A boy was given a present of £20 by his uncle. The bar chart shows how he used the money.



What percentage of the money did he save?



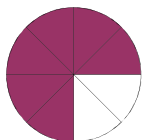
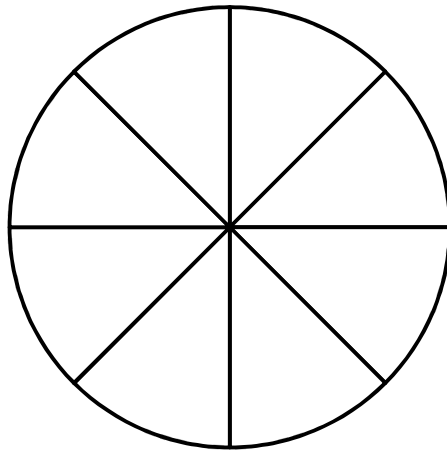
4. The garden shown in the diagram below has a path of 1m wide on two of its sides. What is the area of the path?



5. Write down the number which should go in the box.

$$2 \times \square + 7 = 29$$

6. Shade in  $\frac{3}{4}$  of the circle



ANSWERS: 1 £2.84 2. 28 3. 30% 4. 16m<sup>2</sup> 5. 11 6.